

Centre Number	Candidate Number	Name
---------------	------------------	------

CAMBRIDGE INTERNATIONAL EXAMINATIONS
International General Certificate of Secondary Education

CHEMISTRY

0620/03

Paper 3

October/November 2003

1 hour 15 minutes

Candidates answer on the Question Paper.
No Additional Materials are required.

READ THESE INSTRUCTIONS FIRST

Write your name, Centre number and candidate number at the top of this page.
Write in dark blue or black pen in the spaces provided on the Question Paper.
You may use a pencil for any diagrams, graphs or rough working.
Do not use staples, paper clips, highlighters, glue or correction fluid.

Answer **all** questions.

The number of marks is given in brackets [] at the end of each question or part question.
A copy of the Periodic Table is printed on page 12.

For Examiner's Use	
1	
2	
3	
4	
5	
TOTAL	

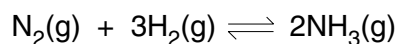
If you have been given a label, look at the details. If any details are incorrect or missing, please fill in your correct details in the space given at the top of this page.

Stick your personal label here, if provided.

This document consists of **10** printed pages and **2** blank pages.



- 1 Ammonia contains the elements nitrogen and hydrogen. It is manufactured from these elements in the Haber process.



The forward reaction is exothermic.

- (a) (i) Nitrogen is obtained from liquid air by fractional distillation. Why does this technique separate liquid oxygen and nitrogen?

.....

- (ii) Name **two** raw materials from which hydrogen is manufactured.

.....[3]

- (b) The table shows how the percentage of ammonia in the equilibrium mixture varies with pressure at 600 °C.

percentage ammonia	8	12	15	20
pressure/atm	200	300	400	500

- (i) Explain why the percentage of ammonia increases as the pressure increases.

.....
[2]

- (ii) How would the percentage of ammonia change if the measurements had been made at a lower temperature?
 Explain your answer.

.....

[2]

- (iii) State **two** of the reaction conditions used in the Haber Process.

.....
[2]

(c) Ammonia is a base.

(i) Name a particle that an ammonia molecule can accept from an acid.

.....

(ii) Write an equation for ammonia acting as a base.

.....[3]

(d) Given aqueous solutions, 0.1 mol/dm^3 , of sodium hydroxide and ammonia, describe how you could show that ammonia is the weaker base.

.....

.....[2]

(e) Another compound that contains nitrogen and hydrogen is hydrazine, N_2H_4 .

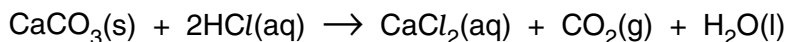
(i) Draw the structural formula of hydrazine. Hydrogen can form only one bond per atom but nitrogen can form three.

(ii) Draw a diagram that shows the arrangement of the valency electrons in one molecule of hydrazine. Hydrazine is a covalent compound.
Use x to represent an electron from a nitrogen atom.
Use o to represent an electron from a hydrogen atom.

[3]

- 2 Some of the factors that can determine the rate of a reaction are concentration, temperature and light intensity.


- (a) A small piece of calcium carbonate was added to an excess of hydrochloric acid. The time taken for the carbonate to react completely was measured.



The experiment was repeated at the same temperature, using pieces of calcium carbonate of the same size but with acid of a different concentration. In all the experiments an excess of acid was used.

concentration of acid / mol dm ⁻³	4	2	2
number of pieces of carbonate	1	1	2	1
time / s	80	160

- (i) Complete the table (assume the rate is proportional to both the acid concentration and the number of pieces of calcium carbonate). [3]
- (ii) Explain why the reaction rate would increase if the temperature was increased.
.....
.....[2]
- (iii) Explain why the rate of this reaction increases if the piece of carbonate is crushed to a powder.
.....[1]
- (iv) Fine powders mixed with air can explode violently. Name an industrial process where there is a risk of this type of explosion.
.....
.....[1]
- (b) Sodium chlorate(I) decomposes to form oxygen and sodium chloride. This is an example of a photochemical reaction. The rate of reaction depends on the intensity of the light.



- (i) Describe how the rate of this reaction could be measured.

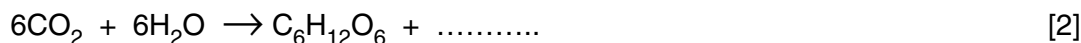
.....
.....[2]

(ii) How could you show that this reaction is photochemical?

.....
.....[1]

(c) Photosynthesis is another example of a photochemical reaction. Glucose and more complex carbohydrates are made from carbon dioxide and water.

(i) Complete the equation.



(ii) Glucose can be represented as



Draw the structure of a more complex carbohydrate that can be formed from glucose by condensation polymerisation.

[2]

3 Zinc blende is the common ore of zinc. It is usually found mixed with an ore of lead and traces of silver.

(a) (i) Describe how zinc blende is changed into zinc oxide.

.....
.....[2]

(ii) Write an equation for the reduction of zinc oxide by carbon.

.....[2]

(iii) The boiling point of lead is 1740 °C and that of zinc is 907 °C. Explain why, when both oxides are reduced by heating with carbon at 1400 °C, only lead remains in the furnace.

.....
.....[2]

(b) A major use of zinc is to make diecasting alloys. These contain about 4% of aluminium and they are stronger and less malleable than pure zinc.

(i) Give one other large scale use of zinc.

.....[1]

(ii) Describe the structure of a typical metal, such as zinc, and explain why it is malleable.

.....

.....

.....[3]

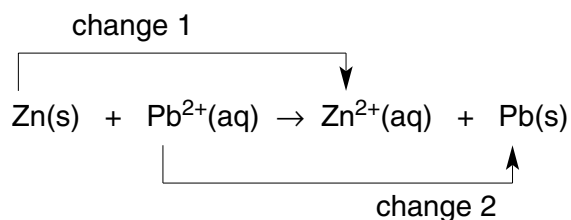
(iii) Suggest why the introduction of a different metallic atom into the structure makes the alloy stronger than the pure metal.

.....

.....[2]

(c) A solution of an impure zinc ore contained zinc, lead and silver(I) ions. The addition of zinc dust will displace both lead and silver.

(i) The ionic equation for the displacement of lead is as follows.



Which change is reduction? Explain your answer.

.....

.....[2]

(ii) Write an ionic equation for the reaction between zinc atoms and silver(I) ions.

.....[2]

- 4 Esters occur naturally in plants and animals. They are manufactured from petroleum. Ethyl ethanoate and butyl ethanoate are industrially important as solvents.

(a) (i) Explain the term *solvent*.

.....[1]

(ii) Give the formula of ethyl ethanoate.

[1]

(iii) Ethyl ethanoate can be made from ethanol and ethanoic acid. Describe how these chemicals can be made.

ethanol from ethene

.....
.....[2]

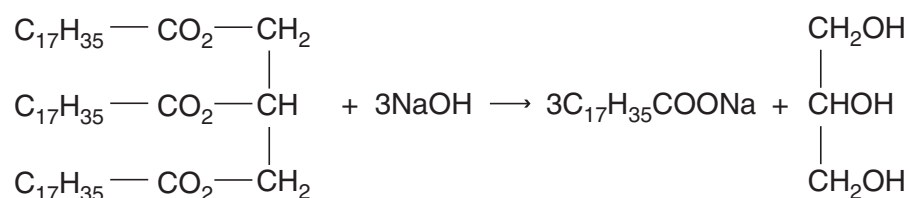
ethanoic acid from ethanol

.....
.....[2]

(iv) Name **two** chemicals from which butyl ethanoate can be made.

.....[1]

(b) The following equation represents the alkaline hydrolysis of a naturally occurring ester.



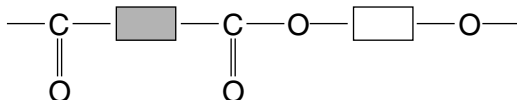
(i) Which substance in the equation is an alcohol? Underline the substance in the equation above.

[1]

(ii) What is the major use for compounds of the type $\text{C}_{17}\text{H}_{35}\text{COONa}$?

.....[1]


(c) A polymer has the structure shown below.



(i) What type of polymer is this?

.....[1]

(ii) Complete the following to give the structures of the two monomers from which the above polymer could be made.



[2]

(d) Esters are frequently used as solvents in chromatography. A natural macromolecule was hydrolysed to give a mixture of amino acids. These could be identified by chromatography.

(i) What type of macromolecule was hydrolysed?

.....[1]

(ii) What type of linkage was broken by hydrolysis?

.....[1]

(iii) Explain why the chromatogram must be sprayed with a locating agent before the amino acids can be identified.

.....
.....[1]

(iv) Explain how it is possible to identify the amino acids from the chromatogram.

.....
.....[2]

5 Sulphur dioxide, SO_2 , and sulphur trioxide, SO_3 , are the two oxides of sulphur.

(a) Sulphur dioxide can kill bacteria and has bleaching properties. Give a use of sulphur dioxide that depends on each of these properties.

(i) ability to kill bacteria[1]

(ii) bleaching properties[1]

(b) Sulphur trioxide can be made from sulphur dioxide.

(i) Why is this reaction important industrially?

.....[1]

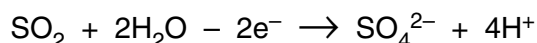
(ii) Complete the word equation.

sulphur dioxide + \rightarrow sulphur trioxide [1]

(iii) What are the conditions for this reaction?

.....
.....[2]

(c) Sulphur dioxide is easily oxidised in the presence of water.



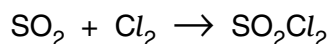
(i) What colour change would be observed when an excess of aqueous sulphur dioxide is added to an acidic solution of potassium manganate(VII)?

.....[2]

(ii) To aqueous sulphur dioxide, acidified barium chloride solution is added. The mixture remains clear. When bromine is added, a thick white precipitate forms. What is the white precipitate? Explain why it forms.

.....
.....[3]

(d) Sulphur dioxide reacts with chlorine in an addition reaction to form sulphuryl chloride.



8.0 g of sulphur dioxide was mixed with 14.2 g of chlorine. The mass of one mole of SO_2Cl_2 is 135 g.

Calculate the mass of sulphuryl chloride formed by this mixture.

Calculate the number of moles of SO_2 in the mixture =

Calculate the number of moles of Cl_2 in the mixture =

Which reagent was not in excess?

How many moles of SO_2Cl_2 were formed =

Calculate the mass of sulphuryl chloride formed = g

[5]

DATA SHEET
The Periodic Table of the Elements

		Group																																											
I	II	III	IV	V	VI	VII	VIII	IX	X	XI	XII																																		
		<table border="1" style="width: 100%; border-collapse: collapse; text-align: center;"> <tr> <td style="width: 15%;">1 H Hydrogen 1</td> <td colspan="10"></td> </tr> </table>										1 H Hydrogen 1																																	
1 H Hydrogen 1																																													
<table border="1" style="width: 100%; border-collapse: collapse; text-align: center;"> <tr> <td style="width: 15%;">7 Li Lithium 3</td> <td style="width: 15%;">9 Be Beryllium 4</td> <td colspan="10"></td> </tr> </table>	7 Li Lithium 3	9 Be Beryllium 4																																											
7 Li Lithium 3	9 Be Beryllium 4																																												
<table border="1" style="width: 100%; border-collapse: collapse; text-align: center;"> <tr> <td style="width: 15%;">23 Na Sodium 11</td> <td style="width: 15%;">24 Mg Magnesium 12</td> <td colspan="10"></td> </tr> </table>	23 Na Sodium 11	24 Mg Magnesium 12																																											
23 Na Sodium 11	24 Mg Magnesium 12																																												
<table border="1" style="width: 100%; border-collapse: collapse; text-align: center;"> <tr> <td style="width: 15%;">39 K Potassium 19</td> <td style="width: 15%;">40 Ca Calcium 20</td> <td style="width: 15%;">45 Sc Scandium 21</td> <td style="width: 15%;">48 Ti Titanium 22</td> <td style="width: 15%;">51 V Vanadium 23</td> <td style="width: 15%;">52 Cr Chromium 24</td> <td style="width: 15%;">55 Mn Manganese 25</td> <td style="width: 15%;">56 Fe Iron 26</td> <td style="width: 15%;">59 Co Cobalt 27</td> <td style="width: 15%;">59 Ni Nickel 28</td> <td style="width: 15%;">64 Cu Copper 29</td> <td style="width: 15%;">65 Zn Zinc 30</td> <td style="width: 15%;">70 Ga Gallium 31</td> <td style="width: 15%;">73 Ge Germanium 32</td> <td style="width: 15%;">75 As Arsenic 33</td> <td style="width: 15%;">79 Se Selenium 34</td> <td style="width: 15%;">84 Kr Krypton 36</td> </tr> </table>	39 K Potassium 19	40 Ca Calcium 20	45 Sc Scandium 21	48 Ti Titanium 22	51 V Vanadium 23	52 Cr Chromium 24	55 Mn Manganese 25	56 Fe Iron 26	59 Co Cobalt 27	59 Ni Nickel 28	64 Cu Copper 29	65 Zn Zinc 30	70 Ga Gallium 31	73 Ge Germanium 32	75 As Arsenic 33	79 Se Selenium 34	84 Kr Krypton 36																												
39 K Potassium 19	40 Ca Calcium 20	45 Sc Scandium 21	48 Ti Titanium 22	51 V Vanadium 23	52 Cr Chromium 24	55 Mn Manganese 25	56 Fe Iron 26	59 Co Cobalt 27	59 Ni Nickel 28	64 Cu Copper 29	65 Zn Zinc 30	70 Ga Gallium 31	73 Ge Germanium 32	75 As Arsenic 33	79 Se Selenium 34	84 Kr Krypton 36																													
<table border="1" style="width: 100%; border-collapse: collapse; text-align: center;"> <tr> <td style="width: 15%;">85 Rb Rubidium 37</td> <td style="width: 15%;">88 Sr Strontium 38</td> <td style="width: 15%;">89 Y Yttrium 39</td> <td style="width: 15%;">91 Zr Zirconium 40</td> <td style="width: 15%;">93 Nb Niobium 41</td> <td style="width: 15%;">96 Mo Molybdenum 42</td> <td style="width: 15%;">101 Ru Ruthenium 44</td> <td style="width: 15%;">103 Rh Rhodium 45</td> <td style="width: 15%;">106 Pd Palladium 46</td> <td style="width: 15%;">108 Ag Silver 47</td> <td style="width: 15%;">112 Cd Cadmium 48</td> <td style="width: 15%;">115 In Indium 49</td> <td style="width: 15%;">119 Sn Tin 50</td> <td style="width: 15%;">122 Sb Antimony 51</td> <td style="width: 15%;">128 Te Tellurium 52</td> <td style="width: 15%;">131 Xe Xenon 54</td> </tr> </table>	85 Rb Rubidium 37	88 Sr Strontium 38	89 Y Yttrium 39	91 Zr Zirconium 40	93 Nb Niobium 41	96 Mo Molybdenum 42	101 Ru Ruthenium 44	103 Rh Rhodium 45	106 Pd Palladium 46	108 Ag Silver 47	112 Cd Cadmium 48	115 In Indium 49	119 Sn Tin 50	122 Sb Antimony 51	128 Te Tellurium 52	131 Xe Xenon 54																													
85 Rb Rubidium 37	88 Sr Strontium 38	89 Y Yttrium 39	91 Zr Zirconium 40	93 Nb Niobium 41	96 Mo Molybdenum 42	101 Ru Ruthenium 44	103 Rh Rhodium 45	106 Pd Palladium 46	108 Ag Silver 47	112 Cd Cadmium 48	115 In Indium 49	119 Sn Tin 50	122 Sb Antimony 51	128 Te Tellurium 52	131 Xe Xenon 54																														
<table border="1" style="width: 100%; border-collapse: collapse; text-align: center;"> <tr> <td style="width: 15%;">133 Cs Caesium 55</td> <td style="width: 15%;">137 Ba Barium 56</td> <td style="width: 15%;">139 La Lanthanum 57</td> <td style="width: 15%;">178 Hf Hafnium 72</td> <td style="width: 15%;">181 Ta Tantalum 73</td> <td style="width: 15%;">184 W Tungsten 74</td> <td style="width: 15%;">190 Os Osmium 76</td> <td style="width: 15%;">192 Ir Iridium 77</td> <td style="width: 15%;">195 Pt Platinum 78</td> <td style="width: 15%;">197 Au Gold 79</td> <td style="width: 15%;">201 Hg Mercury 80</td> <td style="width: 15%;">204 Tl Thallium 81</td> <td style="width: 15%;">207 Pb Lead 82</td> <td style="width: 15%;">209 Bi Bismuth 83</td> <td style="width: 15%;">210 Po Polonium 84</td> <td style="width: 15%;">210 At Astatine 85</td> <td style="width: 15%;">210 Rn Radon 86</td> </tr> </table>	133 Cs Caesium 55	137 Ba Barium 56	139 La Lanthanum 57	178 Hf Hafnium 72	181 Ta Tantalum 73	184 W Tungsten 74	190 Os Osmium 76	192 Ir Iridium 77	195 Pt Platinum 78	197 Au Gold 79	201 Hg Mercury 80	204 Tl Thallium 81	207 Pb Lead 82	209 Bi Bismuth 83	210 Po Polonium 84	210 At Astatine 85	210 Rn Radon 86																												
133 Cs Caesium 55	137 Ba Barium 56	139 La Lanthanum 57	178 Hf Hafnium 72	181 Ta Tantalum 73	184 W Tungsten 74	190 Os Osmium 76	192 Ir Iridium 77	195 Pt Platinum 78	197 Au Gold 79	201 Hg Mercury 80	204 Tl Thallium 81	207 Pb Lead 82	209 Bi Bismuth 83	210 Po Polonium 84	210 At Astatine 85	210 Rn Radon 86																													
<table border="1" style="width: 100%; border-collapse: collapse; text-align: center;"> <tr> <td style="width: 15%;">87 Fr Francium 87</td> <td style="width: 15%;">88 Ra Radium 88</td> <td style="width: 15%;">226 Ra Radium 88</td> <td style="width: 15%;">227 Ac Actinium 89</td> <td colspan="13"></td> </tr> </table>	87 Fr Francium 87	88 Ra Radium 88	226 Ra Radium 88	227 Ac Actinium 89																																									
87 Fr Francium 87	88 Ra Radium 88	226 Ra Radium 88	227 Ac Actinium 89																																										
		<table border="1" style="width: 100%; border-collapse: collapse; text-align: center;"> <tr> <td style="width: 15%;">140 Ce Cerium 58</td> <td style="width: 15%;">141 Pr Praseodymium 59</td> <td style="width: 15%;">144 Nd Neodymium 60</td> <td style="width: 15%;">150 Sm Samarium 62</td> <td style="width: 15%;">152 Eu Europium 63</td> <td style="width: 15%;">157 Gd Gadolinium 64</td> <td style="width: 15%;">162 Dy Dysprosium 66</td> <td style="width: 15%;">165 Ho Holmium 67</td> <td style="width: 15%;">167 Er Erbium 68</td> <td style="width: 15%;">169 Tm Thulium 69</td> <td style="width: 15%;">173 Yb Ytterbium 70</td> <td style="width: 15%;">175 Lu Lutetium 71</td> <td colspan="5"></td> </tr> <tr> <td style="width: 15%;">232 Th Thorium 90</td> <td style="width: 15%;">232 Pa Protactinium 91</td> <td style="width: 15%;">238 U Uranium 92</td> <td style="width: 15%;">94 Pu Plutonium 94</td> <td style="width: 15%;">95 Am Americium 95</td> <td style="width: 15%;">96 Cm Curium 96</td> <td style="width: 15%;">97 Bk Berkelium 97</td> <td style="width: 15%;">99 Es Einsteinium 99</td> <td style="width: 15%;">100 Fm Fermium 100</td> <td style="width: 15%;">101 Md Mendelevium 101</td> <td style="width: 15%;">102 No Nobelium 102</td> <td style="width: 15%;">103 Lr Lawrencium 103</td> <td colspan="5"></td> </tr> </table>										140 Ce Cerium 58	141 Pr Praseodymium 59	144 Nd Neodymium 60	150 Sm Samarium 62	152 Eu Europium 63	157 Gd Gadolinium 64	162 Dy Dysprosium 66	165 Ho Holmium 67	167 Er Erbium 68	169 Tm Thulium 69	173 Yb Ytterbium 70	175 Lu Lutetium 71						232 Th Thorium 90	232 Pa Protactinium 91	238 U Uranium 92	94 Pu Plutonium 94	95 Am Americium 95	96 Cm Curium 96	97 Bk Berkelium 97	99 Es Einsteinium 99	100 Fm Fermium 100	101 Md Mendelevium 101	102 No Nobelium 102	103 Lr Lawrencium 103					
140 Ce Cerium 58	141 Pr Praseodymium 59	144 Nd Neodymium 60	150 Sm Samarium 62	152 Eu Europium 63	157 Gd Gadolinium 64	162 Dy Dysprosium 66	165 Ho Holmium 67	167 Er Erbium 68	169 Tm Thulium 69	173 Yb Ytterbium 70	175 Lu Lutetium 71																																		
232 Th Thorium 90	232 Pa Protactinium 91	238 U Uranium 92	94 Pu Plutonium 94	95 Am Americium 95	96 Cm Curium 96	97 Bk Berkelium 97	99 Es Einsteinium 99	100 Fm Fermium 100	101 Md Mendelevium 101	102 No Nobelium 102	103 Lr Lawrencium 103																																		

* 58-71 Lanthanoid series
† 90-103 Actinoid series

a	X
b	b

a = relative atomic mass
X = atomic symbol
b = proton (atomic) number

The volume of one mole of any gas is 24 dm³ at room temperature and pressure (r.t.p.).