

Reading For Today: 16.5-16.7 in 5th and 4th editions

Reading for lecture# 28: 16.8-16.11 in 4th and 5th editions

Topic: I. d-Block Metals or Transition Metals

II. Coordination Complexes (Chelate effect, Shapes, Isomers)

III. d-orbital Counting and d-orbitals

I. d-Block Metals or Transition Metals

Elements in groups 3-12 are d-block metals, often referred to as _____ metals.

Group→	1	2	3	4	5	6	7	8	9	10	11	12	13	14	15	16	17	18
↓Period																		
1	1 H																	2 He
2	3 Li	4 Be											5 B	6 C	7 N	8 O	9 F	10 Ne
3	11 Na	12 Mg	d-block metals or transition metals										13 Al	14 Si	15 P	16 S	17 Cl	18 Ar
4	19 K	20 Ca	21 Sc	22 Ti	23 V	24 Cr	25 Mn	26 Fe	27 Co	28 Ni	29 Cu	30 Zn	31 Ga	32 Ge	33 As	34 Se	35 Br	36 Kr
5	37 Rb	38 Sr	39 Y	40 Zr	41 Nb	42 Mo	43 Tc	44 Ru	45 Rh	46 Pd	47 Ag	48 Cd	49 In	50 Sn	51 Sb	52 Te	53 I	54 Xe
6	55 Cs	56 Ba	*	72 Hf	73 Ta	74 W	75 Re	76 Os	77 Ir	78 Pt	79 Au	80 Hg	81 Tl	82 Pb	83 Bi	84 Po	85 At	86 Rn
7	87 Fr	88 Ra	**	104 Rf	105 Db	106 Sg	107 Bh	108 Hs	109 Mt	110 Ds	111 Rg	112 Cn	113 Uut	114 Fl	115 Uup	116 Lv	117 Uus	118 Uuo
				57 La	58 Ce	59 Pr	60 Nd	61 Pm	62 Sm	63 Eu	64 Gd	65 Tb	66 Dy	67 Ho	68 Er	69 Tm	70 Yb	71 Lu
				** 89 Ac	90 Th	91 Pa	92 U	93 Np	94 Pu	95 Am	96 Cm	97 Bk	98 Cf	99 Es	100 Fm	101 Md	102 No	103 Lr

Periodic Table of the Elements, by DePiep 2013. Wikimedia Commons.

d-block metals naturally occurring in biology – V, Cr, Mn, Fe, Co, Ni, Cu, Zn, Mo, Cd, W.

d-block metals used as probes of biological systems and/or pharmaceuticals include: Cr, Co, Y, Tc, Ag, Cd, Pt, Au, Hg.

Roles of metals in biology include:

global cycling of nitrogen, carbon, hydrogen; biosynthesis of vitamins and deoxynucleotides; respiration; photosynthesis etc

IN THEIR OWN WORDS

Dr. Sarah Bowman studies a protein from a pathogenic bacterium that is found in the stomach and is known to cause ulcers. She explains how the bacterium survives in the low pH environment of the stomach by using nickel-dependent proteins to buffer the acidity of its environment.



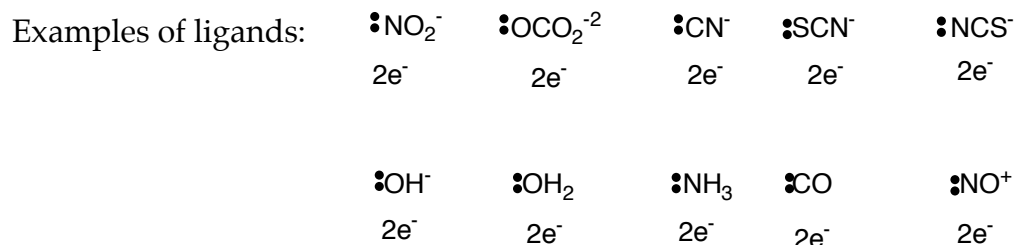
Image from "Behind the Scenes at MIT". The Drennan Education Laboratory. Licensed under a Creative Commons Attribution-NonCommercial-ShareAlike License.

II. Coordination Complexes

A key feature of transition metals is their ability to form complexes with small molecules and ions.

Positive metals ions can attract electron density, usually a lone pair of electrons from another atom or molecule to form a coordination complex.

Donor atoms are called ligands (Lewis _____ – typically _____ one lone pair of electrons)

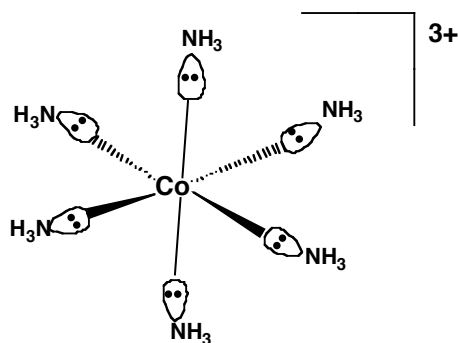


Acceptor atoms are transition metals (Lewis _____ – _____ one lone pair of electrons)

Examples of transition metals: Ti, Cr, Mn, Fe, Co, Ir, Pt, etc

Coordination complexes are composed of metals that are surrounded by ligands.

Example:

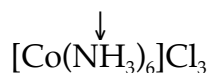
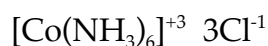


Coordination number (CN) is the number of ligands bonded to the metal ion.

Here CN = 6. _____ ligands comprise the primary coordination sphere.

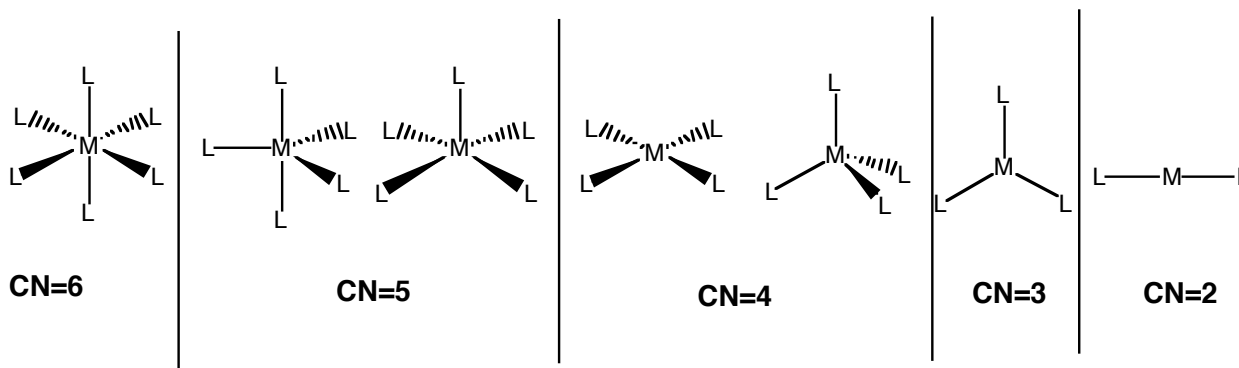
CN numbers typically range from 2-12. Six is the most common.

Coordination Complex Notation



NH₃ within bracket is bound to Co; Cl outside bracket is a counter ion.

Structures of coordination complexes (M = Metal, L = Ligand)



Chelates: another name for coordination complexes, from the Greek word for claws.

Ligands _____ a metal by binding with one or more sites of attachment

Monodentate (one tooth): one point of attachment

Bidentate: _____ points of attachment

Tridentate: _____ points of attachment

Tetradentate : _____ points of attachment

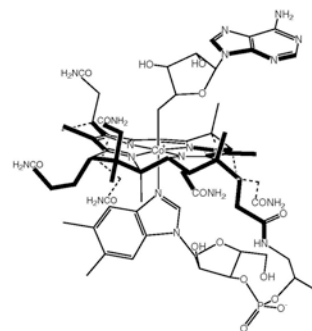
Hexadentate: _____ points of attachment

Examples of multidentate chelates

1. Vitamin B₁₂.

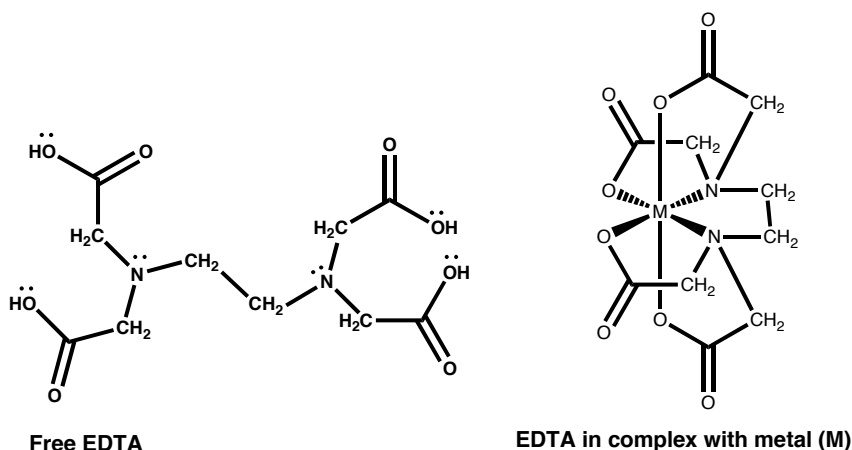
Cobalt is coordinated by a planar tetradentate ligand (corrin ring).

It is also coordinated by an upper axial ligand (5'-deoxyadenosine) and a lower axial ligand (dimethylbenzimidazole)



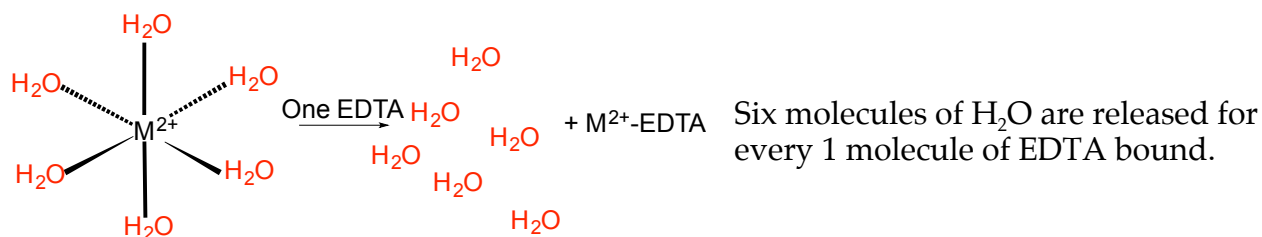
It's structure was determined using X-ray crystallography by British Crystallographer Dorothy Crowfoot Hodgkin. She won the Nobel Prize in 1964 for this work and for determining the structure of penicillin.

2. Ethylenediamine tetraacetic acid (EDTA).



Geometry around M is _____
 _____ dentate

Binding of EDTA is _____ favorable.



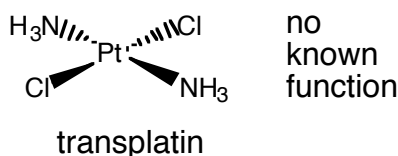
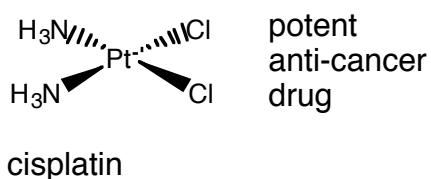
The Chelate Effect refers to the unusually _____ of metal chelates due to the favorable entropic factor accompanying release of non-chelating ligands (usually H₂O) from the coordination sphere.

Uses of EDTA

Isomers

Geometric isomers can have vastly different properties.

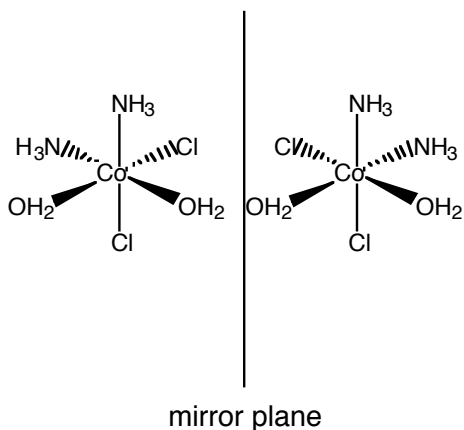
[Pt(NH₃)₂Cl₂] has two geometric isomers



Only when the Cl ligands on same side (cis to each other) can the molecule bind to DNA. Cisplatin cured Lance Armstrong of cancer.

Optical isomers (enantiomers, _____ molecules) are non-superimposable mirror images of each other.

Chiral molecules have different properties in chiral environments (such as a human body).



III. d-Electron Counting in Coordination Complexes and d-Orbitals

d-electron count of metal = group number (periodic table) - oxidation number of metal

1. find oxidation number

for Co in $[\text{Co}(\text{NH}_3)_6]^{3+}$ = _____
Hint: NH₃ is a neutral ligand

2. d-count is $9 - \underline{\quad} = \underline{\quad}$ $d^{??}$

Practice with d-counts

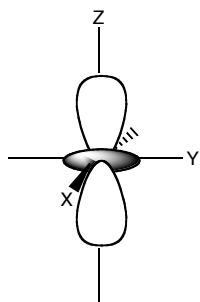
Complexes	Oxidation number of metal	d-count
$[\text{Ni}(\text{CO})_4]$		

$[\text{Co}(\text{H}_2\text{O})_2(\text{NH}_3)\text{Cl}_3]^-$

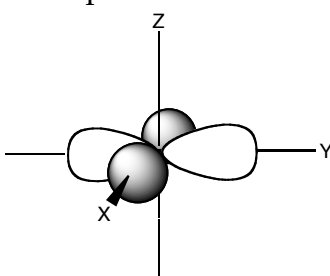
d Orbitals

There are five d orbitals: d_{xy} , d_{xz} , d_{yz} , $d_{x^2-y^2}$, d_{z^2} .

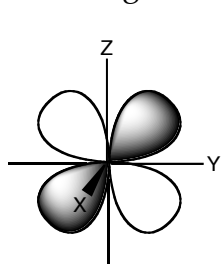
You need to be able to draw their shapes.



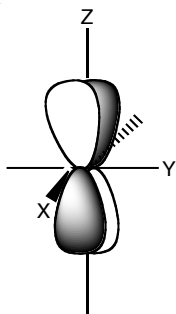
d_{z^2} has maximum amplitude along z and doughnut in xy plane



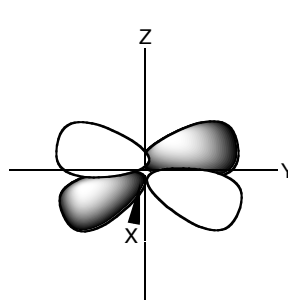
$d_{x^2-y^2}$ has maximum amplitude along x and y axes.



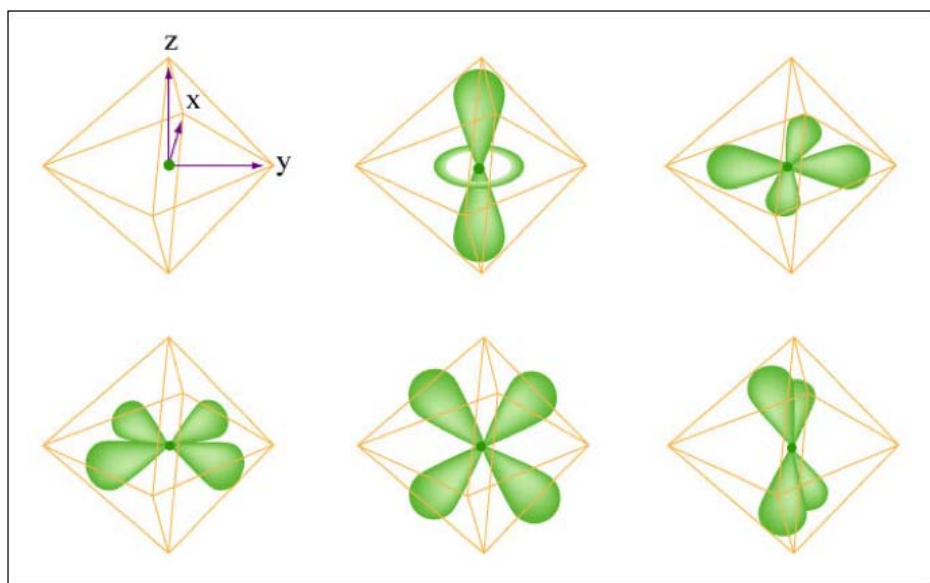
d_{yz} has maximum amplitude 45° to y and z axes



d_{xz} has maximum amplitude 45° to x and z axes



d_{xy} has maximum amplitude 45° to x and y axes



MIT OpenCourseWare
<https://ocw.mit.edu>

5.111 Principles of Chemical Science
Fall 2014

For information about citing these materials or our Terms of Use, visit: <https://ocw.mit.edu/terms>.