

Readings for today: Section 2.5 – 2.8 Lewis Structures (Same sections in 5th and 4th ed.)

Read for Lecture #11: Section 2.9 – Radicals and Biradicals, Section 2.10 - Expanded Valence Shells, Section 2.11 - Group 13/III Compounds (Same sections in 5th and 4th ed.)

Topics:

- I. Lewis structures
- II. Formal charge
- III. Resonance structures

I. LEWIS STRUCTURES

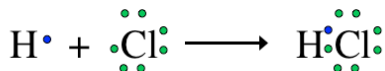
G.N. Lewis (American scientist, 1875-1946). Twenty years prior to the development of quantum mechanics, Lewis recognized an organizing principle in bonding. Namely that:

The key to covalent bonding is **electron sharing**, such that each atom achieves a _____ valence shell (noble gas configuration).

OCTET RULE: electrons are distributed in such a way that each element is surrounded by eight electrons, an octet. Each dot in a Lewis structure represents a _____ e⁻.



EXCEPTION WITH H: special stability is achieved with _____ electrons.



Each valence e⁻ in a molecule can be described as a bonding or a lone-pair electron.

For **Cl** in **HCl**

- _____ bonding electrons
- _____ lone-pair electrons or _____ lone pairs

Lewis structures correctly predict electron configurations 90% of the time. Our other option: solve the Schrödinger equation.

PROCEDURE FOR DRAWING LEWIS STRUCTURES

1. Draw a **skeleton structure**. H and F are always terminal atoms. The element with the lowest ionization energy goes in the middle (with some exceptions).
2. Count the total number of **valence electrons**. If there is a negative ion, add the absolute value of total charge to the count of valence electrons; if positive ion, subtract.
3. Count the **total # of e⁻s needed** for each atom to have a full valence shell.
4. Subtract the number in step 2 (valence electrons) from the number in step 3 (total electrons for full shells). The result is the **number of bonding electrons**.
5. Assign 2 bonding electrons to each bond.

- If bonding electrons remain, make some double or triple bonds. In general, double bonds form only between C, N, O, and S. Triple bonds are usually restricted to C, N, and O.
- If valence electrons remain, assign them as lone pairs, giving octets to all atoms except hydrogen.
- Determine the formal charge.

EXAMPLES

Hydrogen cyanide (HCN)

Cyanide ion (CN⁻)

- skeletal structure.
(Atom in the middle for HCN is _____)
- # of valence e⁻s. (Don't forget charges)
- # of e⁻s for each atom to have a full valence shell.
- # of bonding e⁻s.
- Assign 2 bonding electrons per bond.
- remaining bonding electrons? _____
- remaining lone pair e⁻s? _____
- determine formal charge (we will come back to this in a minute).

II. FORMAL CHARGE (FC)

Formal charge is a measure of the extent to which an atom has gained or lost an _____ in the process of forming a covalent bond.

To assign formal charge, use the formula below.

$$\mathbf{FC = V - L - (\frac{1}{2})B}$$

V = number of _____ electrons

L = number of _____ electrons

B = number of _____ electrons

For an electronically-neutral molecule, the sum of the formal charges of the individual atoms must be _____.

For a molecule with a net charge of -1, the sum of the formal charges of its atoms must be _____.

The sum of individual formal charges must equal the total charge on the molecule!

Let's go back to CN⁻.



$$\text{FC on C} = \mathbf{V - L - (\frac{1}{2})B} = \underline{\quad} - \underline{\quad} - (\frac{1}{2}) \underline{\quad} = \underline{\quad}$$

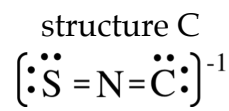
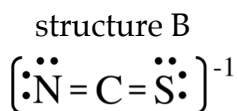
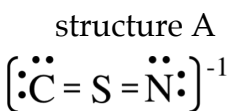
$$\text{FC on N} = \mathbf{V - L - (\frac{1}{2})B} = \underline{\quad} - \underline{\quad} - (\frac{1}{2}) \underline{\quad} = \underline{\quad}$$

Note: FORMAL CHARGE \neq OXIDATION NUMBER

Formal charge is very helpful in deciding between possible Lewis structures. **Structures with lower absolute values of FC are the _____ stable (lower energy) structures.**

For example, consider the three possible structures for an ion of thiocyanate (a thiocyanate ion contains 1C, 1S, and 1N, and has a charge of -1). The ionization energies in kJ/mol for C, S, and N are $IE_C = 1090$, $IE_S = 1000$, $IE_N = 1400$.

Based on IE alone, we would predict _____ to be the central atom.



$$\text{FC}_N = \underline{\quad}$$

$$\text{FC}_N = \underline{\quad}$$

$$\text{FC}_N = 5 - 0 - 4 = \underline{\quad}$$

$$\text{FC}_C = \underline{\quad}$$

$$\text{FC}_C = \underline{\quad}$$

$$\text{FC}_C = 4 - 4 - 2 = \underline{\quad}$$

$$\text{FC}_S = \underline{\quad}$$

$$\text{FC}_S = \underline{\quad}$$

$$\text{FC}_S = 6 - 4 - 2 = \underline{\quad}$$

The most stable structures is _____.

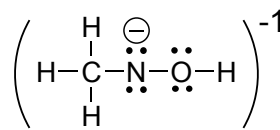
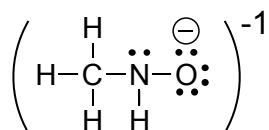
If two valid Lewis structures have the same absolute value of formal charges, the more stable structure is the one with a negative formal charge on the more _____ atom.

CH₃ is a _____ group.

These groups are always terminal.

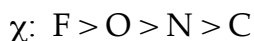


For "chain" molecules, atoms usually written in order. Terminal atoms usually follow the atom to which they are attached.



Zero FC on all other atoms

Zero FC on all other atoms



_____ energy structure

III. RESONANCE STRUCTURES

For certain molecules, more than one Lewis structure is needed to correctly describe the valence electron structure of the molecule.

For example, consider the Lewis structure(s!) of ozone, O₃.



A B C
structure 1



A B C
structure 2

- 1) skeletal structure
- 2) valence e⁻s: 3(6) = _____
- 3) full shell e⁻s: 3(8) = _____
- 4) bonding e⁻s: _____ - _____ = _____
- 5) assign bonding e⁻s
- 6) remaining bonding e⁻s: 2
- 7) remaining valence e⁻s (assigned as lone pairs): 12
- 8) formal charges:

MIT OpenCourseWare
<http://ocw.mit.edu>

5.111 Principles of Chemical Science
Fall 2014

For information about citing these materials or our Terms of Use, visit: <http://ocw.mit.edu/terms>.